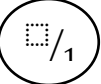
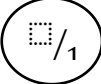
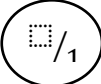
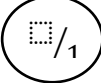
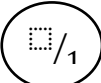
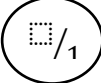
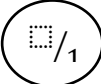
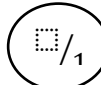


	Question	Working out and answer	Mark
1.	$142 + 100 =$	<div style="border: 1px solid black; width: 100%; height: 100%; background-color: #f0f0f0; display: flex; align-items: center; justify-content: center;"> <div style="border: 1px solid black; width: 80%; height: 80%;"></div> </div>	
2.	$256 - 70 =$	<div style="border: 1px solid black; width: 100%; height: 100%; background-color: #f0f0f0; display: flex; align-items: center; justify-content: center;"> <div style="border: 1px solid black; width: 80%; height: 80%;"></div> </div>	
3.	$84 \div 7 =$	<div style="border: 1px solid black; width: 100%; height: 100%; background-color: #f0f0f0; display: flex; align-items: center; justify-content: center;"> <div style="border: 1px solid black; width: 80%; height: 80%;"></div> </div>	
4.	$\frac{2}{12} + \frac{9}{12} =$	<div style="border: 1px solid black; width: 100%; height: 100%; background-color: #f0f0f0; display: flex; align-items: center; justify-content: center;"> <div style="border: 1px solid black; width: 80%; height: 80%;"></div> </div>	
5.	$\frac{10}{11} - \frac{4}{11} =$	<div style="border: 1px solid black; width: 100%; height: 100%; background-color: #f0f0f0; display: flex; align-items: center; justify-content: center;"> <div style="border: 1px solid black; width: 80%; height: 80%;"></div> </div>	
6.	$4128 + 5690 =$	<div style="border: 1px solid black; width: 100%; height: 100%; background-color: #f0f0f0; display: flex; align-items: center; justify-content: center;"> <div style="border: 1px solid black; width: 80%; height: 80%;"></div> </div>	
7.	$5481 - 846 =$	<div style="border: 1px solid black; width: 100%; height: 100%; background-color: #f0f0f0; display: flex; align-items: center; justify-content: center;"> <div style="border: 1px solid black; width: 80%; height: 80%;"></div> </div>	
8.	12×12	<div style="border: 1px solid black; width: 100%; height: 100%; background-color: #f0f0f0; display: flex; align-items: center; justify-content: center;"> <div style="border: 1px solid black; width: 80%; height: 80%;"></div> </div>	

9.	$9 \times 3 \times 2$		
10.	136×2		
11.	$6.3 + 0.5$		
12.	$69 \div 10$		
13.	$\frac{4}{10}$ of 80 =		
14.	$42\,541 + 6871$		
15.	$57\,000 - 300$		
16.	$55\,5640 - 64\,984 =$		

25.	124 x 11		
26.	3412 x 22		
27.	357 ÷ 7		
28.	1684 ÷ 4		